

## 2<sup>nd</sup>/3<sup>rd</sup> Grade – Week 5

### Required Work to be Completed & Submitted

Work in this packet is optional and may or may not be turned into the teacher. It is enough work for 3 days only.

Daily Math/Math Concepts/ <a href="http://thatquiz.org">thatquiz.org</a>	45 minutes per day
Daily Language	20 minutes per day
Practice Reading Fluency/Language Arts Worksheet	30 minutes per day
Reading (book of choice)	15 minutes per day
iRead iREAD <i>must</i> be accessed through the internet browser, <b>Google Chrome</b> . <a href="https://h100003728.education.scholastic.com">https://h100003728.education.scholastic.com</a>	30 minutes per day
Writing Day 1 Graphic Organizer 2 and 3 Day 2 Graphic Organizer 4 and 5 Day 3 Write your paragraph on lined paper and draw a picture	3 times per week Monday/Tuesday/Wednesday

If you have any questions about work in this packet, please reach out to your teacher via email or during scheduled office hours, which are posted on <https://jacobson.tracy.k12.ca.us/>.

Thank you!

1.  $20 + 60 + 10 = \underline{\hspace{2cm}}$

4. Match:

2. 
$$\begin{array}{r} 875 \\ - 452 \\ \hline \end{array}$$

eighteen      20

thirteen      18

twenty      12

twelve      13

3. Fill in the correct symbol.

&lt; = &gt;

216 ○ 261

5. Herbert has 21 baseball cards.

If he buys 13 more, how many cards will he have?

                 cards

1.  $5,893 + 0 = \underline{\hspace{2cm}}$

4. Write an even number.

2. 
$$\begin{array}{r} 426 \\ + 231 \\ \hline \end{array}$$

3. Name the shape.

5. Megan spent 35¢ on chips and 50¢ on a cold drink. How much did her snack cost?

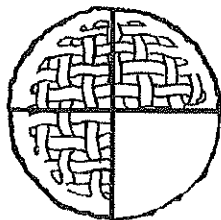
                ¢

1.  $6 + 12 + 10 =$  \_\_\_\_\_

4. 1 hundred + 2 tens + 0 ones =  
\_\_\_\_\_

2. 
$$\begin{array}{r} 20 \\ - 8 \\ \hline \end{array}$$

3. How much of this pie has been eaten?
- 
- \_\_\_\_\_



5. Max was paid 75¢ for walking Mrs. Lee's dogs. He gave Bob 35¢ for helping him. How much money did Max have left?
- 
- \_\_\_\_\_¢

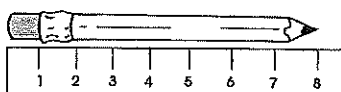
1.  $294 - 294 =$  \_\_\_\_\_

2. 
$$\begin{array}{r} 53 \\ + 28 \\ \hline \end{array}$$

4. Which is the most money?

- ☐ 4 dimes
- ☐ 6 nickels
- ☐ 2 quarters

3. How long is the pencil?
- 
- \_\_\_\_\_



\_\_\_\_\_ cm

5. If one pair of roller skates has 8 wheels, how many wheels will two pairs of skates have?
- 
- \_\_\_\_\_ wheels

Name: \_\_\_\_\_

## Multiplication with Arrays

You can find the answer to basic multiplication facts by making a symbol picture called an array.

An array is a group of symbols arranged in straight rows and columns.

x x x x x x x

x x x x x x x

x x x x x x x

3 rows of 7 symbols equals 21 symbols.

$3 \times 7 = 21$

Draw an array to find the answer to each multiplication fact below.  
Be sure you draw your symbols in neat, straight rows and columns.

$4 \times 5 = \underline{\hspace{2cm}}$

$6 \times 4 = \underline{\hspace{2cm}}$

$3 \times 8 = \underline{\hspace{2cm}}$

$3 \times 9 = \underline{\hspace{2cm}}$

$5 \times 8 = \underline{\hspace{2cm}}$

$7 \times 4 = \underline{\hspace{2cm}}$

$4 \times 9 = \underline{\hspace{2cm}}$

$5 \times 5 = \underline{\hspace{2cm}}$


Name: \_\_\_\_\_

Date: \_\_\_\_\_

# TouchCount to Buy

## Worksheet 11

**DIRECTIONS:** Read each word problem. Look at the price tag below the item for sale. Then, answer the questions.



79¢



95¢



68¢



54¢

1

Juan has:



How much money does he have? \_\_\_\_\_ ¢

Does he have enough money to buy  ? \_\_\_\_\_

2

Sasha has:



How much money does she have? \_\_\_\_\_ ¢

Does she have enough money to buy a  ? \_\_\_\_\_










Name : \_\_\_\_\_

Score : \_\_\_\_\_

Teacher : \_\_\_\_\_

Date : \_\_\_\_\_

What Time Is It ?



**Monday****Correct the sentences.**

1. what did that man asks she and annie

\_\_\_\_\_

2. did them boys swam in the lake

\_\_\_\_\_

**Find the abbreviation for a day of the week.**

3. Dec.      Tsp.      Mon.

**What is the subject of this sentence—a or b?**4. A hungry hawk swooped down to catch a mouse.

a

b

**How many syllables are in this word?**

5. grandmother \_\_\_\_\_

**Tuesday****Correct the sentences.**

1. roger is my friend we like to do the same things

\_\_\_\_\_

2. what kind of ice cream does her like best

\_\_\_\_\_

**Find the missing word.**3. What was Mother \_\_\_\_\_ about?  
smile    smiled    smiling**What two words are in "buttercup"?**

4. \_\_\_\_\_

**What happened when it started to rain?**

5. Megan opened her umbrella when it started to rain.

**Wednesday****Correct the sentences.**

1. how do them cats catch mouse

\_\_\_\_\_

2. put a apple in the basket

\_\_\_\_\_

**Find the missing word.**3. We have a \_\_\_\_\_ girl in our class.  
new      knew**What does the word "nimble" mean in this sentence?**

4. The nimble goat jumped up on the roof of the farmer's shed.

a. in a hurry      b. quick with good balance      c. long-haired

**Which word means the same as "make"?**

5. find      buy      take      build      tear

**Thursday****Correct the sentences.**

1. what are you gonna do this week

\_\_\_\_\_

2. them dogs rolled in an mud puddle

\_\_\_\_\_

**Which word is spelled correctly?**

3. wuz      took      skippt

**Find the abbreviation for a month of the year.**

4. Fri.      Dec.      Dr.      Sat.

**Name two words that rhyme with "same."**

5. \_\_\_\_\_



## Common Cents

If you have one hundred of these, you have a dollar. What are we talking about? We are talking about the penny. The penny is the most common coin in the United States. The U.S. Mint produces billions of these coins each year.

The U.S. Mint made its first copper penny in 1793. Since then, there have been many different pictures on pennies. Abraham Lincoln's picture went on the penny in 1909. The other side showed wheat. Today, Lincoln's face is still on the penny.

Pennies are now made of zinc. They have only a tiny bit of copper in them. Over the years, some things have changed with the penny. But one thing remains the same. A penny is still worth one cent.

- ✓ Whose face is on the penny today?
- ✓ Name two things that have changed about the penny over time.

Name: \_\_\_\_\_ Date: \_\_\_\_\_

### Common Cents

10 If you have one hundred of these, you have a  
 19 dollar. What are we talking about? We are talking  
 28 about the penny. The penny is the most common  
 37 coin in the United States. The U.S. Mint produces  
 43 billions of these coins each year.  
 52 The U.S. Mint made its first copper penny in  
 60 1793. Since then, there have been many different  
 66 pictures on pennies. Abraham Lincoln's picture  
 76 went on the penny in 1909. The other side showed  
 85 wheat. Today, Lincoln's face is still on the penny.  
 94 Pennies are now made of zinc. They have only  
 105 a tiny bit of copper in them. Over the years, some  
 114 things have changed with the penny. But one thing  
 124 remains the same. A penny is still worth one cent.



Whose face is on the penny today?



Name two things about the penny that have changed over time.

Words Read	-	Errors	=	WCPM

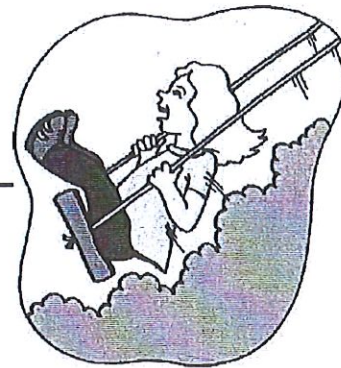
- ☐ Fall (51 WCPM)  
☐ Winter (72 WCPM)  
☐ Spring (89 WCPM)

WCPM	/	Words Read	=	Accuracy %

PROSODY				
	L1	L2	L3	L4
Reading in Phrases	<input type="radio"/>	<input type="radio"/>	<input type="radio"/>	<input type="radio"/>
Pace	<input type="radio"/>	<input type="radio"/>	<input type="radio"/>	<input type="radio"/>
Syntax	<input type="radio"/>	<input type="radio"/>	<input type="radio"/>	<input type="radio"/>
Self-correction	<input type="radio"/>	<input type="radio"/>	<input type="radio"/>	<input type="radio"/>
Intonation	<input type="radio"/>	<input type="radio"/>	<input type="radio"/>	<input type="radio"/>

\_\_\_\_\_  
\_\_\_\_\_  
Name: \_\_\_\_\_

## A-B-C Order



Rewrite each word list in alphabetical order.

1. pool, swim, water, dive

\_\_\_\_\_  
\_\_\_\_\_  
\_\_\_\_\_ , \_\_\_\_\_ , \_\_\_\_\_

2. beach, sand, wave, rock

\_\_\_\_\_  
\_\_\_\_\_  
\_\_\_\_\_ , \_\_\_\_\_ , \_\_\_\_\_

3. warm, sun, cloud, hot

\_\_\_\_\_  
\_\_\_\_\_  
\_\_\_\_\_ , \_\_\_\_\_ , \_\_\_\_\_

4. play, tag, run, hide

\_\_\_\_\_  
\_\_\_\_\_  
\_\_\_\_\_ , \_\_\_\_\_ , \_\_\_\_\_

5. tent, fire, sing, camp

\_\_\_\_\_  
\_\_\_\_\_  
\_\_\_\_\_ , \_\_\_\_\_ , \_\_\_\_\_

Name: \_\_\_\_\_ Date: \_\_\_\_\_

# SUMMER Word SEARCH

Directions: Use the word bank at the bottom to find the summer words.

M	O	W	A	V	E	S	Y	J	F	N	S	Z	T	U
S	U	N	I	H	F	H	K	P	L	A	Y	M	P	C
X	R	T	I	S	K	L	T	E	S	D	F	B	O	E
H	D	F	H	U	B	S	M	B	P	E	U	H	O	Y
U	V	P	E	M	X	W	H	X	O	A	G	J	L	U
K	A	U	N	M	D	I	E	Q	P	O	S	M	R	B
D	C	I	Z	E	H	M	U	W	S	P	K	X	U	S
A	A	V	G	R	Y	F	D	S	I	E	S	A	N	D
X	T	J	C	L	T	H	C	H	C	T	K	W	O	A
M	I	D	S	K	R	K	N	E	L	G	A	G	S	G
P	O	A	E	H	O	T	K	L	E	S	L	O	U	J
G	N	Z	Y	A	F	E	G	L	A	V	O	U	R	L
J	H	X	K	M	N	K	D	S	F	B	H	Y	F	R
D	B	E	A	C	H	P	M	T	U	K	A	R	L	V
V	N	U	O	P	E	D	G	A	N	M	X	E	M	N

## WORD BANK


SUMMER	WAVES	BEACH
HOT	PLAY	SWIM
FUN	POPSICLE	SHELLS
SAND	POOL	SURF
VACATION	ALOHA	SUN



Name: \_\_\_\_\_

# Hippo and Frog

By Katie Clark



Hippo squishes mud between her toes. She gulps down lily pads. She blows bubbles in the water. Blub blub blub.

Hippo loves her home in the pond.

Frog watches her. He lives in the pond too.

Frog said, "I like you Hippo, but I don't like mud. It is messy."

Hippo said, "I am sorry. I will tiptoe through the mud. I will not be messy."

Frog said, "I like you Hippo, but I do not like it when you eat the lily pads. I like to hop on them."

Hippo said, "I am sorry. I will not eat the lily pads. You can hop on them. I will eat the grass instead."

Frog said, "I like you Hippo, but I do not like bubbles in the water. It is loud when I swim."

Hippo said, "I am sorry. I will not blow bubbles in the water."


Frog said, "You are very kind Hippo. Thank you for being my friend."



Name: \_\_\_\_\_

# Hippo and Frog

By Katie Clark



1. Where do Hippo and Frog live?
  - a. in a river
  - b. in a lake
  - c. in a pond
  - d. in the woods
2. Why doesn't Frog like it when Hippo squishes her toes in the mud?
  - a. The mud gets on Frog.
  - b. It makes a mess.
  - c. It makes the pond smell bad.
  - d. Frog wants the mud.
3. Frog tells Hippo that he does not like it when she eats the lily pads.  
\_\_\_\_\_
4. Why doesn't Frog like it when Hippo blows bubbles in the water?  
\_\_\_\_\_
5. Why does Frog say, "You are very kind," to Hippo?  
\_\_\_\_\_  
\_\_\_\_\_


Name: \_\_\_\_\_

Date: \_\_\_\_\_



② First,

③ Next,

①  One day I won a million dollars  
and spent it on a few things for my  
family.

④ Then

⑤ 

40



