

2nd/3rd Grade – Week 3

Required Work to be Completed & Submitted

Work in this packet must be completed and submitted to your teacher. Pages can be scanned and emailed, photos can be taken and sent via email or messaging app (ex: Remind), or completed packets can be turned in to campus on May 15th.

Daily Math/Math Concepts/ thatquiz.org	45 minutes per day
Daily Language	20 minutes per day
Practice Reading Fluency/Language Arts Worksheet	30 minutes per day
Reading (book of choice)	20 minutes per day
iRead iREAD <i>must</i> be accessed through the internet browser, Google Chrome . https://h100003728.education.scholastic.com	30 minutes per day
Writing Day 1 Graphic Organizer 2 and 3 Day 2 Graphic Organizer 4 and 5 Day 3 Write your paragraph on lined paper and draw a picture	3 times per week Monday/Wednesday/Friday

If you have any questions about work in this packet, please reach out to your teacher via email or during scheduled office hours, which are posted on <https://jacobson.tracy.k12.ca.us/>.

Thank you!

1. $37 + 10 = \underline{\hspace{2cm}}$

4. + 6 = 16

$$\begin{array}{r} 2. \quad 218 \\ - \quad 6 \\ \hline \end{array}$$

- 3.** Write the numbers in order.

169 167 170 166 168

- 5.** Glenn's grandfather is 56 years old. His brother is 12 years old. How much older is Glenn's grandfather?

_____ years

1. $30 + 50 = \underline{\hspace{2cm}}$

4. 1 hour = _____ minutes

$$\begin{array}{r} 2. \quad 45 \\ - 14 \\ \hline \end{array}$$

- 3.** Mark the words that tell how you can measure milk.

gallon

foot

liter

pound

quart

meter

- 5.** Joan put 37¢ into her piggy bank. She took out 2 nickels and 3 pennies. How much money is left in Joan's bank?


_____¢

1. $16 - 2 - 8 = \underline{\hspace{2cm}}$

4. Write zero.


2.
$$\begin{array}{r} 15 \\ + 16 \\ \hline \end{array}$$

3. How are these objects different?



- ☐ different shape ☐ different color
☐ different size ☐ they are the same


5. The picnic started at 3:15. It lasted for three hours. Show what time it ended.



1. $16 - 11 = \underline{\hspace{2cm}}$

4. Make 32 tally marks.

2.
$$\begin{array}{r} 233 \\ + 420 \\ \hline \end{array}$$

Which is first? Which is last? 5. Penny's pet hen laid an egg a day for two weeks. How many eggs did the hen lay?

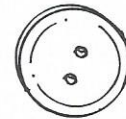
 eggs

Complete the chart. Write the letter of each object in the correct box.

SPHERE	CIRCLE



A



B




C



D



E



F

Now draw one more object in each box.

How many did you get correct each day? Color the squares.


5					
4					
3					
2					
1					
	Monday	Tuesday	Wednesday	Thursday	Friday

1. $25 - 15 = \underline{\hspace{2cm}}$

4. Fill in the correct symbol.

< = >

2.
$$\begin{array}{r} 19 \\ + 9 \\ \hline \end{array}$$

sixteen  nineteen

3. Write an odd number.

5. If Willie has 23 chickens in a pen and 11 escape, how many chickens will still be in the pen?

 chickens

1. $24 + 43 = \underline{\hspace{2cm}}$

4. $64 = \underline{\hspace{1cm}}$ tens and $\underline{\hspace{1cm}}$ ones

2.
$$\begin{array}{r} 33 \\ - 16 \\ \hline \end{array}$$

3. What time is it?

 :

5. There are 36 boys and 23 girls in second grade. How many more boys are there?

 more boys

1. $8 + 8 + 4 + 4 = \underline{\hspace{2cm}}$

4. $30 - \boxed{\hspace{1cm}} = 20$

2.
$$\begin{array}{r} 35 \\ - 0 \\ \hline \end{array}$$

5. Write a word problem for
- $15 + 5$
- .

3. Count by fives.

75

1. $15 + 10 + 14 = \underline{\hspace{2cm}}$

4. $16 + 4 = 20$, so

$20 - 4 = \boxed{\hspace{1cm}}$

2.
$$\begin{array}{r} 68 \\ - 28 \\ \hline \end{array}$$

3. Write the next numbers in the pattern.

2 5 8 11

5. Maizie made 3 cakes. She put 7 candles on each cake. How many candles did she use?

○ ○ ○ 21 ○ 17

Draw an AABCAABC pattern.

Daily Progress Record

How many did you get correct each day? Color the squares.

5					
4					
3					
2					
1					
	Monday	Tuesday	Wednesday	Thursday	Friday

 Add. Regroup.

Match your answers to the number under each line.

Write the letters from the answer boxes on the lines.



A

$$\begin{array}{r} 354 \\ +218 \\ \hline \end{array}$$

D

$$\begin{array}{r} 762 \\ +128 \\ \hline \end{array}$$

E

$$\begin{array}{r} 427 \\ +343 \\ \hline \end{array}$$

G

$$\begin{array}{r} 514 \\ +149 \\ \hline \end{array}$$

H

$$\begin{array}{r} 456 \\ +218 \\ \hline \end{array}$$

L

$$\begin{array}{r} 527 \\ +325 \\ \hline \end{array}$$

M

$$\begin{array}{r} 683 \\ +309 \\ \hline \end{array}$$

N

$$\begin{array}{r} 328 \\ +163 \\ \hline \end{array}$$

O

$$\begin{array}{r} 728 \\ + 68 \\ \hline \end{array}$$

R

$$\begin{array}{r} 156 \\ +319 \\ \hline \end{array}$$

S

$$\begin{array}{r} 946 \\ + 34 \\ \hline \end{array}$$

T

$$\begin{array}{r} 328 \\ +229 \\ \hline \end{array}$$

What must you know before trying to teach a dog tricks?




$$\begin{array}{r} M \\ 992 \end{array} \quad \begin{array}{r} 796 \end{array} \quad \begin{array}{r} 475 \end{array} \quad \begin{array}{r} 770 \end{array}$$

$$\begin{array}{r} 557 \end{array} \quad \begin{array}{r} 674 \end{array} \quad \begin{array}{r} 572 \end{array} \quad \begin{array}{r} 491 \end{array}$$



$$\begin{array}{r} 557 \end{array} \quad \begin{array}{r} 674 \end{array} \quad \begin{array}{r} 770 \end{array} \quad \begin{array}{r} 890 \end{array} \quad \begin{array}{r} 796 \end{array} \quad \begin{array}{r} 663 \end{array}$$












Name : _____

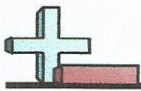
Score : _____

Teacher : _____


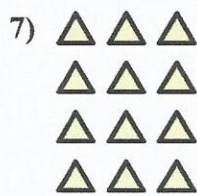




Date : _____

What Time Is It ?





Write an equation to express the array and then find the number of shapes.

AnswersEx. $5 \times 3 = 15$

1. _____

2. _____

3. _____

4. _____

5. _____

6. _____

7. _____

8. _____

9. _____

10. _____

11. _____

12. _____

13. _____

14. _____

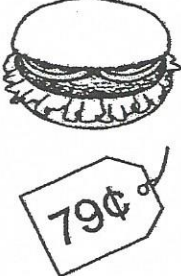

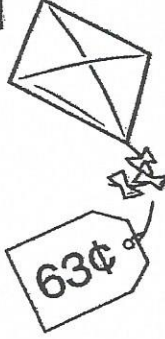

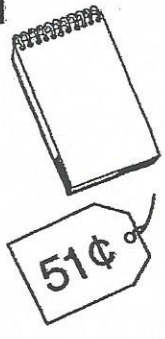

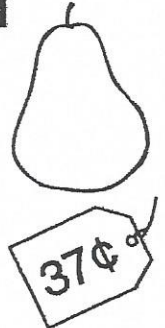

Name: _____

Date: _____

TouchCount to Buy

Assessment 14

DIRECTIONS: TouchCount the coins, and write the total in the blank. Look at the price tag below the item for sale. If you have enough money to buy the item, fill in the circle next to "yes." If you do not, fill in the circle next to "no."

<div>1</div> 		<div>_____ ¢</div> <div><input type="radio"/> yes</div> <div><input type="radio"/> no</div>
<div>2</div> 		<div>_____ ¢</div> <div><input type="radio"/> yes</div> <div><input type="radio"/> no</div>
<div>3</div> 		<div>_____ ¢</div> <div><input type="radio"/> yes</div> <div><input type="radio"/> no</div>
<div>4</div> 		<div>_____ ¢</div> <div><input type="radio"/> yes</div> <div><input type="radio"/> no</div>

Subtraction

$$\begin{array}{r} 926 \\ - 658 \\ \hline \end{array}$$

$$\begin{array}{r} 835 \\ - 368 \\ \hline \end{array}$$

$$\begin{array}{r} 956 \\ - 598 \\ \hline \end{array}$$

$$\begin{array}{r} 923 \\ - 567 \\ \hline \end{array}$$

$$\begin{array}{r} 753 \\ - 378 \\ \hline \end{array}$$

$$\begin{array}{r} 823 \\ - 386 \\ \hline \end{array}$$

$$\begin{array}{r} 925 \\ - 568 \\ \hline \end{array}$$

$$\begin{array}{r} 953 \\ - 368 \\ \hline \end{array}$$

$$\begin{array}{r} 763 \\ - 398 \\ \hline \end{array}$$

$$\begin{array}{r} 932 \\ - 778 \\ \hline \end{array}$$

$$\begin{array}{r} 678 \\ - 593 \\ \hline \end{array}$$

$$\begin{array}{r} 836 \\ - 567 \\ \hline \end{array}$$

Monday**Correct the sentences.**

1. the farmer feeded his sheeps all winter

2. when i grow up, im going to bee a doctor

Which word is spelled correctly?

3. ar our owr aur

Find the pronouns in this sentence.

4. We played a game with them in our backyard.

Write the contraction for "did not."

5. _____

Tuesday**Correct the sentences.**

1. was there aunts on the picnic table

2. the carpenter builded a tall fence and paint it white

Which word means the same as "start"?

3. stop begin hurry part

What word means more than one woman?

4. _____

Where do commas go in this sentence?

5. You will need a hammer nails paint and a paintbrush.

Wednesday**Correct the sentences.**

1. when did mr ruiz learned to fly a airplane

2. Do you like red riding hood or tom thumb

Give two words in the -end word family.

3. _____

Find the missing word.

4. Bill's kite _____ into a tree.

blue

blew

Which word comes first in alphabetical order?

5. egg end eat eel

Thursday**Correct the sentences.**

1. him and me went riding monday morning

2. whats the small white kittens name

Find the missing word.

3. The children were _____ to go to the circus.

begs begged begging

How many syllables are in these words?

4. something _____ Halloween _____

What happened when the rocks fell?

5. His car was dented when the rocks rolled down the hill.

Friday**Find the missing words.**

1. It _____ in his room.
wasn't won't weren't
2. _____ on the table in my room.
Its It's Isn't
3. She works in a bank over _____.
where they're there
4. Jose ran home as _____ as he could.
quickest quicker quickly
5. Speedy is the _____ dog at the dog show.
smart smarter smartest

Daily Progress Record**How many did you get correct each day? Color the squares.**

5					
4					
3					
2					
1					
	Monday	Tuesday	Wednesday	Thursday	Friday

Monday**Correct the sentences.**

1. did you put the milk butter and eggs in the refrigerator

2. do you want to ate a egg for breakfast

What is the abbreviation for "foot"?

3. dr. ft. in. mrs.

Find the word that is the opposite of "play."

4. sit run work sleep

Which word is spelled correctly?

5. huntting smiling skiping

Tuesday**Correct the sentences.**

1. them dirty socks stink

2. why does sid got a bigger piece than i gots

Make two compound words using these words.

some bow rain thing

3. _____

Name two words in the -oat word family.

4. _____

Is it real or make-believe?

5. Some birds lay eggs in nests.

Name: _____

Wednesday

Choose the best word.

1. James _____ to ride the bus home.
have has

2. Doug and Colby _____ a computer at home.
have has

What will happen next?

3. Joe turned on the television. Then...
he ran outside to play. **OR** he sat down to watch.

Fix the sentence.

4. pedro hasnt misst one dai



Name: _____

Thursday

Choose the best word.

1. A snail is _____ than a ladybug.
bigger biggest

2. My pillow is the _____ thing in my room.
softer softest

Yes or no?

3. The hamster lives in a cage. yes no

Fix the sentence.

4. fred brung his bat to schul

Friday

Which things would you need to bake a cake?

bowl

flour

tennis shoes

eggs

catcher's mitt

sugar

spoon

oven

cake pan

rake

recipe

mittens

**Answer Key****Monday** _____

1. boxes
2. ladies
3. Answers will vary.
4. I don't have any money.

Tuesday _____

1. hasn't
2. haven't
3. your
4. Tony the Tiger likes Frosted Flakes.

Wednesday _____

1. has
2. have
3. he sat down to watch.
4. Pedro hasn't missed one day.

Thursday _____



1. bigger
2. softest
3. yes
4. Fred brought his bat to school.

Friday _____

bowl, sugar, cake pan, flour,
spoon, recipe, eggs, oven

The Dog Sled

Bill wanted one thing.
He wanted to ride on a dog sled.
One day, Bill got what he wanted.
He met a man who ran sled dog trips.
The man showed Bill his dogs.
Bill liked Lad the best.
Lad had thick fur. His eyes were big and bright.
Later the man took Bill to a sled.
Ten dogs were tied to the sled.
Lad was one of them.
Bill got into the sled. The dogs took off.
They pulled the sled over snow and ice.
The sled got back home at dark.
The man took off the ropes. Then he fed the dogs.
Bill had a great time.
He wants to ride on the sled again.

-  What did Bill want to do?
-  What time of year does this story probably take place?

Name: _____ Date: _____

The Dog Sled

- 4 Bill wanted one thing.
 12 He wanted to ride on a dog sled.
 19 One day, Bill got what he wanted.
 28 He met a man who ran sled dog trips.
 34 The man showed Bill his dogs.
 39 Bill liked Lad the best.
 49 Lad had thick fur. His eyes were big and bright.
 57 Later the man took Bill to a sled.
 64 Ten dogs were tied to the sled.
 69 Lad was one of them.
 78 Bill got into the sled. The dogs took off.
 86 They pulled the sled over snow and ice.
 93 The sled got back home at dark.
 104 The man took off the ropes. Then he fed the dogs.
 109 Bill had a great time.
 117 He wants to ride on the sled again.



What did Bill want to do?



What time of year does this story probably take place?

Words Read	–	Errors	=	WCPM

☐ Winter (23 WCPM)

☐ Spring (53 WCPM)

WCPM	/	Words Read	=	Accuracy %

	PROSODY			
	L1	L2	L3	L4
Reading in Phrases	<input type="radio"/>	<input type="radio"/>	<input type="radio"/>	<input type="radio"/>
Pace	<input type="radio"/>	<input type="radio"/>	<input type="radio"/>	<input type="radio"/>
Syntax	<input type="radio"/>	<input type="radio"/>	<input type="radio"/>	<input type="radio"/>
Self-correction	<input type="radio"/>	<input type="radio"/>	<input type="radio"/>	<input type="radio"/>
Intonation	<input type="radio"/>	<input type="radio"/>	<input type="radio"/>	<input type="radio"/>

Look at the Good Wood

Focus: Short "oo" with _oo_ Words

Dad got some wood.

It was cold outside, and

they wanted to have a fire.

When Sally opened the door,


Dad stood there with the wood.



"Look at the good wood!" he said.

"There was lots of wood,

and I took the good wood."



He was right. The wood was good.

It heated their house.

Dad used a hook to get some fish.

He cooked the fish on the fire.

The good wood kept the fire hot.

The fish was cooked, and it was good.



Name: _____

1) What did Dad get?

2) What did he use to get some fish?

3) Was the fish good?

Name: _____

Date: _____

Check it out!

- ☐ Capital letter at the beginning of the sentence?

The dog ran.

- ☐ Period at the end of the sentence?

My cat swam.

Directions: Read each sentence. Correct the mistakes.

1. it is time to work

2. you did a good job

3. my grandma is nice

4. it is hot and sunny today

5. pick seven apples

6. i want to read a book

7. turn the light on

8. she can run fast

9. you must say thank you

10. he is seven years old

Long E Word Search

Find these words with the long E sound!

~~WHEEL~~
CREEP
DREAM
WEASEL

STEAL
PEEL
SEEK
BEAM

FEET
KEEP
LEAK
THREE

SEAT
HEAL
LEAF
GREEN

JEEP
PEAK
VEER
MEAN

K	C	L	D	E	A	B	A	L	L	U	U	I	R	A
C	E	P	W	O	S	T	H	R	E	E	O	D	F	E
R	A	L	H	E	A	L	J	Q	I	E	C	R	W	N
E	U	A	E	V	G	B	H	P	G	R	E	E	N	M
E	M	B	E	A	M	F	L	T	S	D	X	A	W	E
P	E	O	L	K	F	E	A	L	P	Y	I	M	B	U
J	U	Z	T	A	L	E	A	K	N	Q	H	E	G	B
D	L	R	X	W	M	T	N	N	K	C	U	S	A	Y
S	P	R	E	E	U	H	Q	L	E	A	J	E	E	P
G	T	I	K	B	P	N	J	S	E	A	T	E	U	T
H	A	E	C	M	E	L	W	B	P	E	A	K	O	Z
D	W	E	A	S	E	L	E	U	U	X	G	M	L	R
P	G	Q	U	L	L	N	A	O	H	E	C	U	B	A

Name: _____

Date: _____

Check it out!

- ☐ Capital letter at the beginning of the sentence?

The dog ran.

- ☐ Period at the end of the sentence?

My cat swam.

Directions: Read each sentence. Correct the mistakes.

1. the sky is blue

2. i like to play soccer

3. pat likes to sing

4. i made my own lunch

5. he had two cookies

6. the brown cow jumped

7. my dress was pink

8. mom is very tired today

9. we laugh a lot

10. jets can fly fast

The Brown Cow in the Tower


Focus: "ow" Pattern Words

There is a brown cow in the tower.
How did the cow get in the tower?



The town clown locked her there.
The clown wanted the cow to plow,
but the brown cow didn't want to plow.
Now the clown's cow is in the tower.

The citizens of the town can vote.
They can help the cow get down.
They have power in the town.
The clown must let the cow down.
The brown cow can come down
from the tower.



Now the clown must plow.
The brown cow sees the clown plow.
Wow! The clown can sure plow!



Name: _____

1) Where is the brown cow?

2) Who locked the cow in the tower?

3) What must the clown do now?


Name: _____

Date: _____



② First,

③ Next,

①  I would like to cook _____
for my family. This is what I
would do.

④ Then,

⑤ 

[The page contains faint, illegible markings and noise.]

READING LOG let's get reading

NAME _____

let's get
reading

[illegible]